

Cambridge International AS & A Level

CANDIDATE
NAME

--

CENTRE
NUMBER

--	--	--	--	--

CANDIDATE
NUMBER

--	--	--	--

MATHEMATICS

9709/51

Paper 5 Probability & Statistics 1

October/November 2023

1 hour 15 minutes

You must answer on the question paper.

You will need: List of formulae (MF19)

INSTRUCTIONS

- Answer **all** questions.
- Use a black or dark blue pen. You may use an HB pencil for any diagrams or graphs.
- Write your name, centre number and candidate number in the boxes at the top of the page.
- Write your answer to each question in the space provided.
- Do **not** use an erasable pen or correction fluid.
- Do **not** write on any bar codes.
- If additional space is needed, you should use the lined page at the end of this booklet; the question number or numbers must be clearly shown.
- You should use a calculator where appropriate.
- You must show all necessary working clearly; no marks will be given for unsupported answers from a calculator.
- Give non-exact numerical answers correct to 3 significant figures, or 1 decimal place for angles in degrees, unless a different level of accuracy is specified in the question.

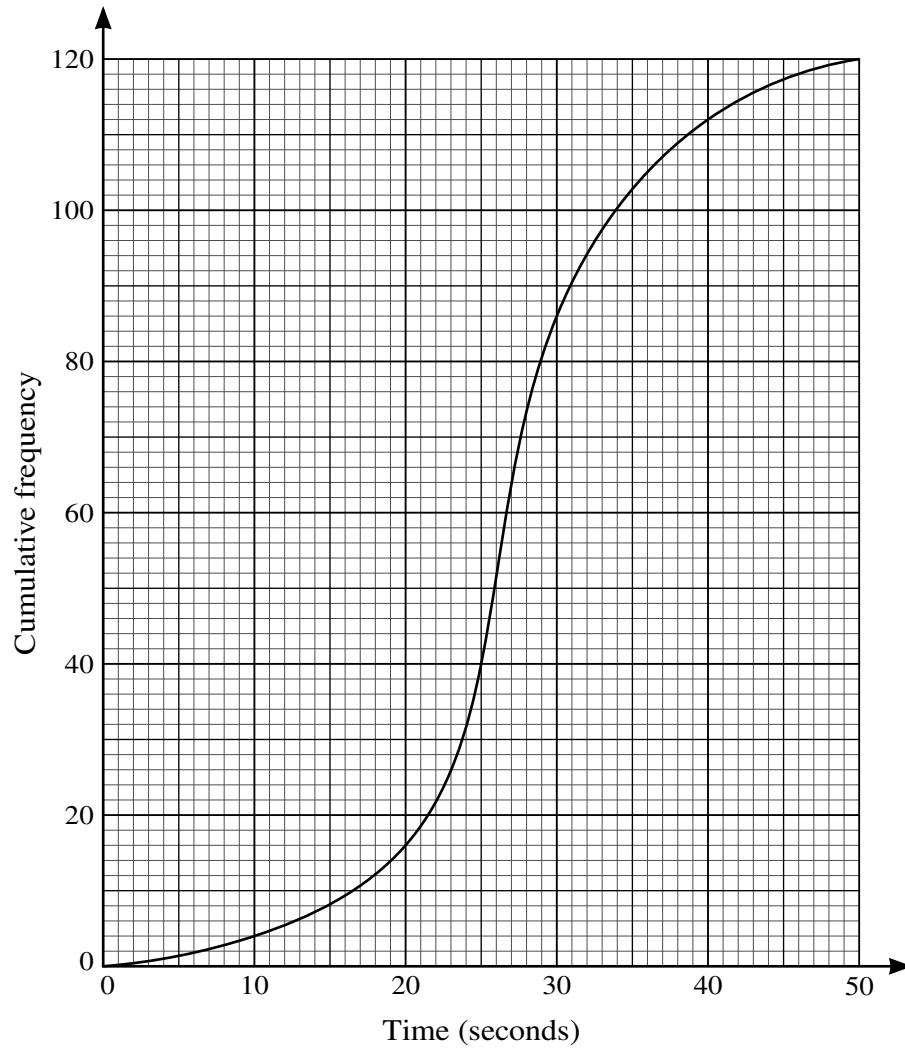
INFORMATION

- The total mark for this paper is 50.
- The number of marks for each question or part question is shown in brackets [].

This document has **16** pages. Any blank pages are indicated.

BLANK PAGE

1



The times taken by 120 children to complete a particular puzzle are represented in the cumulative frequency graph.

- (a) Use the graph to estimate the interquartile range of the data. [2]

.....

.....

.....

35% of the children took longer than T seconds to complete the puzzle.

- (b) Use the graph to estimate the value of T . [2]

.....

.....

.....

- 2 Hazeem repeatedly throws two ordinary fair 6-sided dice at the same time. On each occasion, the score is the sum of the two numbers that she obtains.

- (a) Find the probability that it takes exactly 5 throws of the two dice for Hazeem to obtain a score of 8 or more. [2]

.....

.....

.....

.....

.....

.....

.....

.....

.....

.....

- (b) Find the probability that it takes no more than 4 throws of the two dice for Hazeem to obtain a score of 8 or more. [2]

.....

.....

.....

.....

.....

.....

.....

.....

.....

.....

- (c) For 8 randomly chosen throws of the two dice, find the probability that Hazeem obtains a score of 8 or more on fewer than 3 occasions. [3]

This image shows a full page of primary-ruled paper. It features approximately 20 horizontal dashed lines spaced evenly down the page, providing a guide for handwriting practice. The background is white, and there are no margins or other markings present.

- 3** A farmer sells eggs. The weights, in grams, of the eggs can be modelled by a normal distribution with mean 80.5 and standard deviation 6.6. Eggs are classified as small, medium or large according to their weight. A small egg weighs less than 76 grams and 40% of the eggs are classified as medium.

(a) Find the percentage of eggs that are classified as small. [3]

.....

.....

.....

.....

.....

.....

.....

.....

.....

.....

(b) Find the least possible weight of an egg classified as large. [3]

.....

.....

.....

.....

.....

.....

.....

.....

.....

.....

.....

150 of the eggs for sale last week were weighed.

- (c) Use an approximation to find the probability that more than 68 of these eggs were classified as medium. [5]


This image shows a full page of white paper with horizontal dotted lines. The lines are evenly spaced and run across the width of the page, providing a guide for handwriting practice. There are no margins, text, or other markings on the page.

- 4 The times, to the nearest minute, of 150 athletes taking part in a charity run are recorded. The results are summarised in the table.

Time in minutes	101 – 120	121 – 130	131 – 135	136 – 145	146 – 160
Frequency	18	48	34	32	18

- (a) Draw a histogram to represent this information.

[4]



This image shows a full page of primary-ruled paper. It features approximately 20 horizontal dotted lines spaced evenly down the page, providing a guide for handwriting practice. The paper is otherwise blank, with no margins, text, or other markings.

- 5** A red spinner has four sides labelled 1, 2, 3, 4. When the spinner is spun, the score is the number on the side on which it lands. The random variable X denotes this score. The probability distribution table for X is given below.

x	1	2	3	4
$P(X = x)$	0.28	p	$2p$	$3p$

- (a) Show that $p = 0.12$. [1]

.....

.....

.....

.....

.....

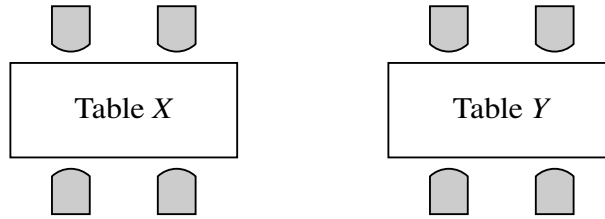
A fair blue spinner and a fair green spinner each have four sides labelled 1, 2, 3, 4. All three spinners (red, blue and green) are spun at the same time.

- (b) Find the probability that the sum of the three scores is 4 or less. [3]

This image shows a full page of white paper with horizontal dashed lines, typical of primary school handwriting practice paper. The lines are evenly spaced and run across the entire width of the page. There are no margins, text, or other markings present.

[illegible]

6



In a restaurant, the tables are rectangular. Each table seats four people: two along each of the longer sides of the table (see diagram). Eight friends have booked two tables, X and Y . Rajid, Sue and Tan are three of these friends.

- (a) The eight friends will be divided into two groups of 4, one group for table X and one group for table Y .

Find the number of ways in which this can be done if Rajid and Sue must sit at the same table as each other and Tan must sit at the other table. [3]

.....

.....

.....

.....

.....

.....

.....

.....

When the friends arrive at the restaurant, Rajid and Sue now decide to sit at table X on the same side as each other. Tan decides that he does not mind at which table he sits.

- (b) Find the number of different seating arrangements for the 8 friends. [3]

.....

.....

.....

.....

.....

.....

.....

.....

.....

.....

.....

.....

.....

.....

.....

As they leave the restaurant, the 8 friends stand in a line for a photograph.

- (c) Find the number of different arrangements if Rajid and Sue stand next to each other, but neither is at an end of the line. [4]

.....

.....

.....

.....

.....

.....

.....

.....

.....

.....

.....

.....

.....

.....

.....

[illegible]

BLANK PAGE

Permission to reproduce items where third-party owned material protected by copyright is included has been sought and cleared where possible. Every reasonable effort has been made by the publisher (UCLES) to trace copyright holders, but if any items requiring clearance have unwittingly been included, the publisher will be pleased to make amends at the earliest possible opportunity.

To avoid the issue of disclosure of answer-related information to candidates, all copyright acknowledgements are reproduced online in the Cambridge Assessment International Education Copyright Acknowledgements Booklet. This is produced for each series of examinations and is freely available to download at www.cambridgeinternational.org after the live examination series.

Cambridge Assessment International Education is part of Cambridge Assessment. Cambridge Assessment is the brand name of the University of Cambridge Local Examinations Syndicate (UCLES), which is a department of the University of Cambridge.